




Name _____



Choose the correct answer.


Use the tally chart for questions 1-4.


Animals on the Farm		Total
 chicken		3
 goat		5
 cow		

1. How many  are on the farm?

- 5 2
 3 1

2. How many more  than  are on the farm?

_____ more 

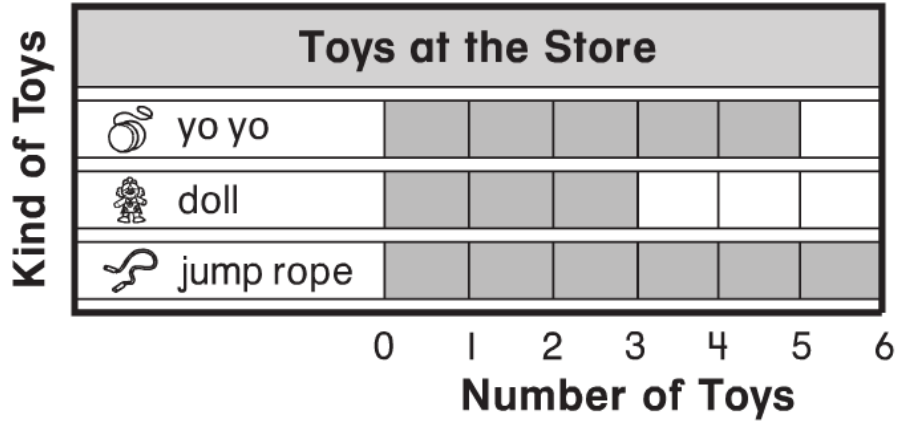
3. There are 5  on the farm. Draw tally marks to show the number 5.

_____ 

4. How many animals are on the farm?

- 5 8
 10 2

Use the bar graph to answer questions 5-8.



5. How many more yo yos than dolls?

5

2

3

8

6. The toy store has _____ jump ropes.

_____ jump ropes

7. The store got 1 more doll. How many dolls are there now?

4

3

1

5

8. How many fewer yo yos than jump ropes?















5

2

1

6

Use the picture graph for questions 9-12.

Our Favorite Sport						
 hockey						
 football						
 soccer						

Each  stands for 1 child.

9. How many more children chose

 than  ?

2

5

6

4

10. How many children

like  ?

_____ children

11. How many children picked

 and  ?

3

1

5

7




12. How many students were surveyed?

_____ students

ANSWER KEY



Choose the correct answer.


Use the tally chart for questions 1-4.


Animals on the Farm		Total
 chicken		3
 goat		5
 cow		

1. How many  are on the farm?

- 5 2
 3 1

2. How many more  than  are on the farm?

___ 1 ___ more 

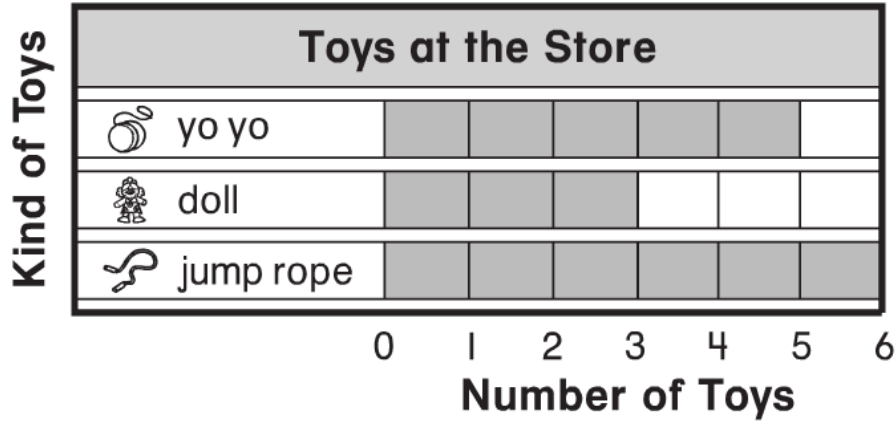
3. There are 5  on the farm. Draw tally marks to show the number 5.



 

4. How many animals are on the farm?

- 5 8
 10 2

Use the bar graph to answer questions 5-8.



5. How many more  yo yos than  dolls?

5



2

3

8

6. The toy store has _____  jump ropes.

_____ 6  jump ropes



7. The store got 1 more  doll. How many  dolls are there now?

4

3

1

5

8. How many fewer  yo yos than  jump ropes?















5

2

1


6

Use the picture graph for questions 9-12.

Our Favorite Sport						
 hockey						
 football						
 soccer						

Each  stands for 1 child.

9. How many more children chose

 than  ?

2 5


6 4

10. How many children

like  ?

 5 children

11. How many children picked

 and  ?

3 1

5 7

12. How many students were surveyed?

 11 students