

Name \_\_\_\_\_

**Choose the correct answer.**

1. Mali plants 5 roses. Justin plants 7 more roses than Mali. Which number sentence shows how to find the number of roses Justin plants?

- $5 + 2 = 7$
- $7 - 5 = 2$
- $5 + 7 = 12$
- $12 - 5 = 7$

2. Alice and Gavin eat 11 apples. Alice eats 6 apples. Which number sentence shows how to find the number of apples Gavin eats?

- $7 + 4 = 11$
- $9 + 6 = 15$
- $3 + 3 = 6$
- $11 - 6 = 5$

3. Look at the pairs of facts. Which shows related facts?

- |                       |                       |
|-----------------------|-----------------------|
| $5 + 8 = 13$          | $8 - 5 = 3$           |
| $8 + 5 = 13$          | $8 + 5 = 13$          |
| <input type="radio"/> | <input type="radio"/> |
| $5 + 8 = 13$          | $5 + 8 = 13$          |
| $8 + 8 = 16$          | $5 + 3 = 8$           |
| <input type="radio"/> | <input type="radio"/> |

4. Look at the pairs of facts. Which shows related facts?

- |                       |                       |
|-----------------------|-----------------------|
| $8 + 9 = 17$          | $9 + 9 = 18$          |
| $8 + 8 = 16$          | $9 - 8 = 1$           |
| <input type="radio"/> | <input type="radio"/> |
| $7 + 6 = 13$          | $8 - 2 = 6$           |
| $7 + 1 = 8$           | $8 - 6 = 2$           |
| <input type="radio"/> | <input type="radio"/> |



Name \_\_\_\_\_

5. Tom uses these numbers to write related facts.

8	9	17
---	---	----

Which could be one of Tom's related facts?

- $8 + 9 = 17$
- $9 - 1 = 8$
- $9 - 8 = 1$
- $16 - 8 = 8$

6. Dawn uses these numbers to write related facts.

4	7	11
---	---	----

Which is **not** one of Dawn's related facts?

- $11 - 7 = 4$
- $4 + 7 = 11$
- $7 + 4 = 11$
- $10 - 7 = 3$

7. Which is a related fact?

$$6 + 7 = 13$$

$$7 + 6 = 13$$

$$13 - 7 = 6$$

- $7 + 7 = 14$
- $13 - 6 = 7$
- $6 + 6 = 12$
- $7 - 6 = 1$

8. Which number is missing from these related facts?

$$\square + 9 = 13 \quad 13 - 9 = \square$$

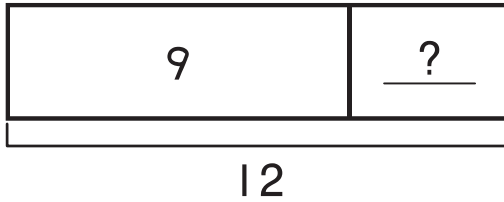
$$9 + \square = 13 \quad 13 - \square = 9$$

- 9
- 8
- 4
- 3



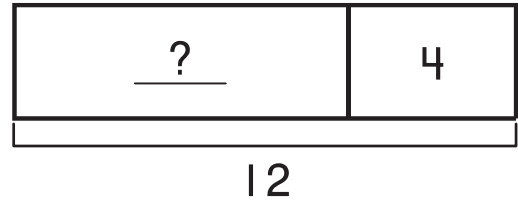
Name \_\_\_\_\_

9. Julia buys 12 books. She gives 9 books away. How many books does she have left?



- 21                       9  
 12                       3

10. Carrie finds 4 pencils on the floor. Now she has 12 pencils. How many pencils did Carrie start with?



- 16                       8  
 12                       4

11. What is the missing number?

$$5 + \square = 12$$

$$12 - \square = 5$$

- 17                       7  
 12                       5

12. What is the missing number?

$$9 + \square = 17$$

- 16  
 9  
 8  
 6



Name \_\_\_\_\_

**Write the correct answer.**

**13.** Write the number that makes the sentence **true**.

$$9 - 2 = 3 + \square$$

\_\_\_\_\_

**14.** Make the sentence **true**.  
Use + or -.

$$4 \square 2 = 2$$

\_\_\_\_\_

**15.** Write the number that makes the sentence **true**.

$$7 - 2 = 1 + \square$$

\_\_\_\_\_

**16.** Write the number that completes the related fact.

$$7 + 4 = 11$$

$$11 - \underline{\quad} = 4$$

\_\_\_\_\_



Name \_\_\_\_\_

17. Write an addition fact that helps you solve  $12 - 7$ .

\_\_\_\_\_

18. The table shows ways to make 12. Write a different way to make 12.

12
$6 + 6$
$3 + 5 + 4$

\_\_\_\_\_

19. Write the number that makes the sentence **true**.

$$5 + 7 + \square = 17$$

\_\_\_\_\_

20. Brian solves this subtraction sentence.

$$17 - 8 = \square$$

Write an addition sentence Brian can use to check his subtraction.

\_\_\_\_\_



Name \_\_\_\_\_

21. Write an addition sentence to check the subtraction.

$$11 - 3 = \square$$

\_\_\_\_\_

22. Mike has 7 jump ropes.  
Kristi has 5 jump ropes.  
How many jump ropes do Mike and Kristi have?



\_\_\_\_\_ jump ropes

23. What is  $4 + 6$ ?

\_\_\_\_\_

24. What is  $7 - 0$ ?

\_\_\_\_\_

**GO ON** 

Name \_\_\_\_\_

**Choose the correct answer.**

1. Mali plants 5 roses. Justin plants 7 more roses than Mali. Which number sentence shows how to find the number of roses Justin plants?

- $5 + 2 = 7$
- $7 - 5 = 2$
- $5 + 7 = 12$
- $12 - 5 = 7$

2. Alice and Gavin eat 11 apples. Alice eats 6 apples. Which number sentence shows how to find the number of apples Gavin eats?

- $7 + 4 = 11$
- $9 + 6 = 15$
- $3 + 3 = 6$
- $11 - 6 = 5$

3. Look at the pairs of facts. Which shows related facts?

- |                                  |                       |
|----------------------------------|-----------------------|
| $5 + 8 = 13$                     | $8 - 5 = 3$           |
| $8 + 5 = 13$                     | $8 + 5 = 13$          |
| <input checked="" type="radio"/> | <input type="radio"/> |
| $5 + 8 = 13$                     | $5 + 8 = 13$          |
| $8 + 8 = 16$                     | $5 + 3 = 8$           |
| <input type="radio"/>            | <input type="radio"/> |

4. Look at the pairs of facts. Which shows related facts?

- |                       |                                  |
|-----------------------|----------------------------------|
| $8 + 9 = 17$          | $9 + 9 = 18$                     |
| $8 + 8 = 16$          | $9 - 8 = 1$                      |
| <input type="radio"/> | <input type="radio"/>            |
| $7 + 6 = 13$          | $8 - 2 = 6$                      |
| $7 + 1 = 8$           | $8 - 6 = 2$                      |
| <input type="radio"/> | <input checked="" type="radio"/> |



Name \_\_\_\_\_

5. Tom uses these numbers to write related facts.

8	9	17
---	---	----

Which could be one of Tom's related facts?

- $8 + 9 = 17$
- $9 - 1 = 8$
- $9 - 8 = 1$
- $16 - 8 = 8$

6. Dawn uses these numbers to write related facts.

4	7	11
---	---	----

Which is **not** one of Dawn's related facts?

- $11 - 7 = 4$
- $4 + 7 = 11$
- $7 + 4 = 11$
- $10 - 7 = 3$

7. Which is a related fact?

$$6 + 7 = 13$$

$$7 + 6 = 13$$

$$13 - 7 = 6$$

- $7 + 7 = 14$
- $13 - 6 = 7$
- $6 + 6 = 12$
- $7 - 6 = 1$

8. Which number is missing from these related facts?

$$\square + 9 = 13 \quad 13 - 9 = \square$$

$$9 + \square = 13 \quad 13 - \square = 9$$

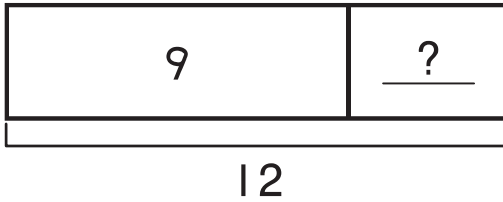
- 9
- 8
- 4
- 3





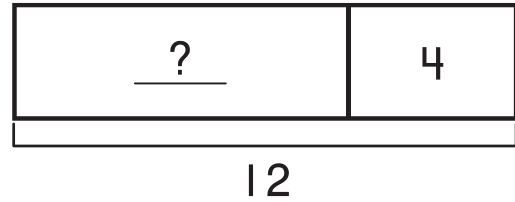
Name \_\_\_\_\_

9. Julia buys 12 books. She gives 9 books away. How many books does she have left?



- 21                       9  
 12                       3

10. Carrie finds 4 pencils on the floor. Now she has 12 pencils. How many pencils did Carrie start with?



- 16                       8  
 12                       4

11. What is the missing number?

$$5 + \square = 12$$

$$12 - \square = 5$$

- 17                       7  
 12                       5

12. What is the missing number?

$$9 + \square = 17$$

- 16  
 9  
 8  
 6



Name \_\_\_\_\_

**Write the correct answer.**

**13.** Write the number that makes the sentence **true**.

$$9 - 2 = 3 + \square$$

\_\_\_\_\_ 4

**14.** Make the sentence **true**.  
Use + or -.

$$4 \square 2 = 2$$

\_\_\_\_\_ -

**15.** Write the number that makes the sentence **true**.

$$7 - 2 = 1 + \square$$

\_\_\_\_\_ 4

**16.** Write the number that completes the related fact.

$$7 + 4 = 11$$

$$11 - \underline{\quad} = 4$$

\_\_\_\_\_ 7



Name \_\_\_\_\_

17. Write an addition fact that helps you solve  $12 - 7$ .

Possible answers:  $7 + 5 = 12$ ;  
 $5 + 7 = 12$

18. The table shows ways to make 12. Write a different way to make 12.

12
$6 + 6$
$3 + 5 + 4$

Possible answers:  $10 + 2$ ;  
 $5 + 6 + 1$ ;  $8 + 4$

19. Write the number that makes the sentence **true**.

$$5 + 7 + \square = 17$$

5

20. Brian solves this subtraction sentence.

$$17 - 8 = \square$$

Write an addition sentence Brian can use to check his subtraction.

Possible answers:  $9 + 8 = 17$ ;  
 $8 + 9 = 17$



Name \_\_\_\_\_

21. Write an addition sentence to check the subtraction.

$$11 - 3 = \square$$

Possible answers:  $8 + 3 = 11$ ;  
 $3 + 8 = 11$

22. Mike has 7 jump ropes.  
Kristi has 5 jump ropes.  
How many jump ropes do  
Mike and Kristi have?



12 jump ropes

23. What is  $4 + 6$ ?

10

24. What is  $7 - 0$ ?

7

GO ON 